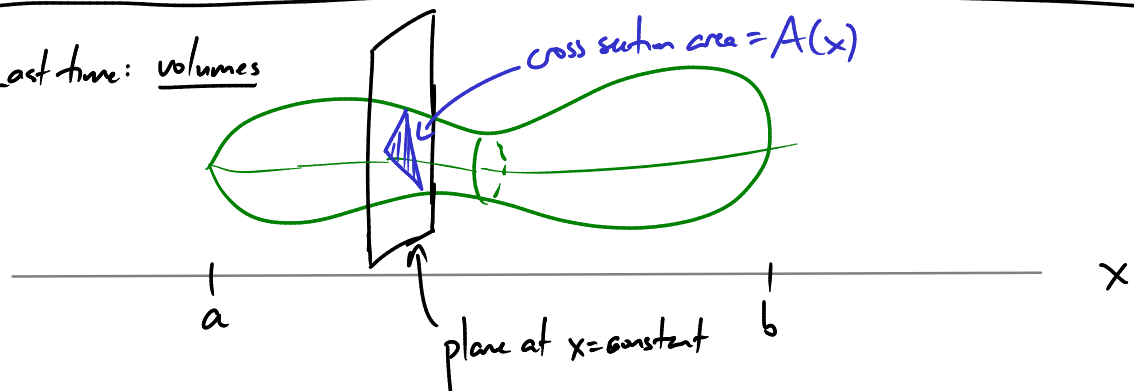


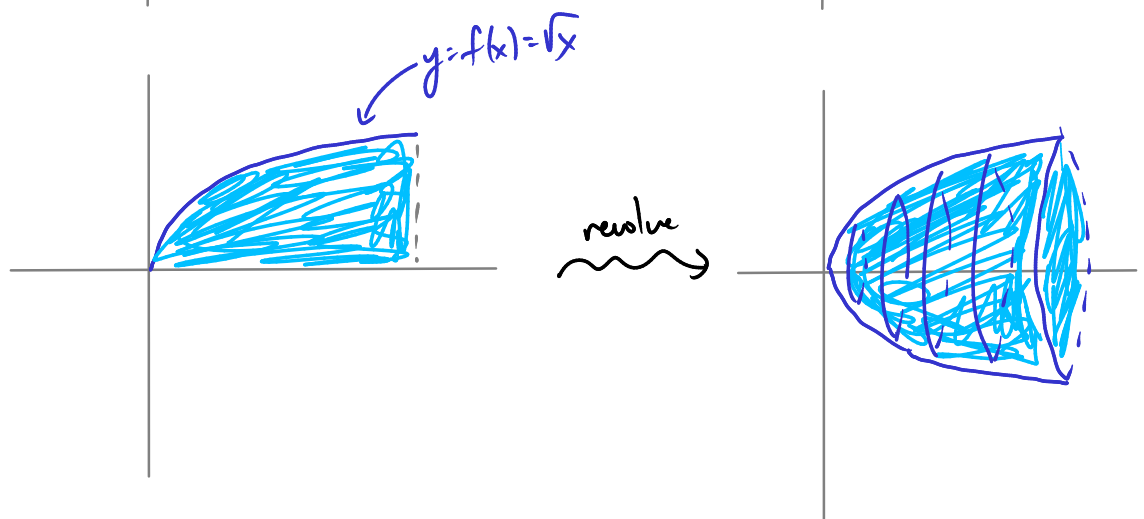
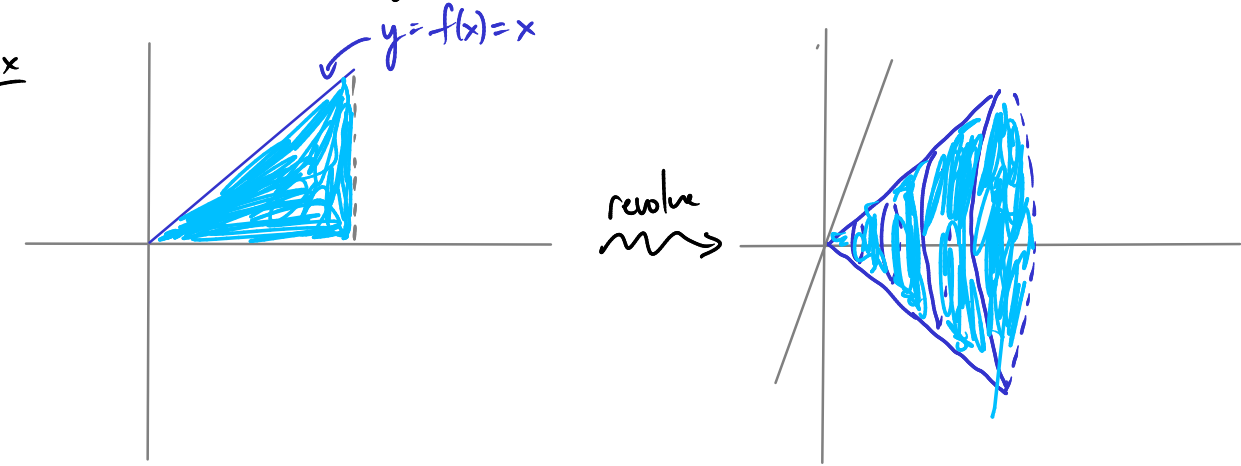
Midterm 3 Dec 7 (next Friday)
in class, as usual

Last time: volumes



A common type of solid: "solid of revolution" — take some region in the x-y plane and revolve it around, say, the x-axis.

Ex



The cross section of such a solid is a circle of radius $f(x)$.
 So cross section area is $\pi \cdot f(x)^2$. We use this to get the volume
 " "
 $A(x)$

Ex Find the volume of the solid obtained by revolving the area between $y = \sqrt{x}$ and the x -axis, around the x -axis, with x running from 0 to 2. (bullet)

$$V = \int_0^2 dx A(x) = \int_0^2 dx \pi \cdot (\sqrt{x})^2 = \int_0^2 dx \pi \cdot x = \pi \cdot \frac{x^2}{2} \Big|_0^2 = \underline{\underline{2\pi}}$$

Ex same question for $y = x$ (cone)

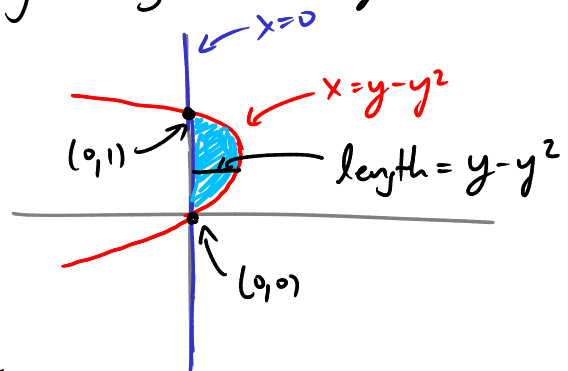
$$V = \int_0^2 dx A(x) = \int_0^2 dx \pi \cdot (x)^2 = \pi \frac{x^3}{3} \Big|_0^2 = \underline{\underline{\frac{8\pi}{3}}}$$

Can also revolve around e.g. the y -axis.

Ex Find the vol of the solid obtained by revolving the region bounded by

$$\begin{aligned} x &= y - y^2 \\ x &= 0 \end{aligned}$$

around the y -axis.



slice by "horizontal" planes $y = \text{constant}$:

cross sections are circles of radius $= y - y^2$ $A(y) = \pi (y - y^2)^2$

$$V = \int_0^1 dy A(y)$$

$$= \int_0^1 dy \pi (y - y^2)^2 = \pi \int_0^1 (y - y^2)^2 dy$$

$$= \pi \int_0^1 (y^2 - 2y^3 + y^4) dy$$

$$= \pi \left(\frac{y^3}{3} - \frac{2y^4}{4} + \frac{y^5}{5} \Big|_0^1 \right)$$

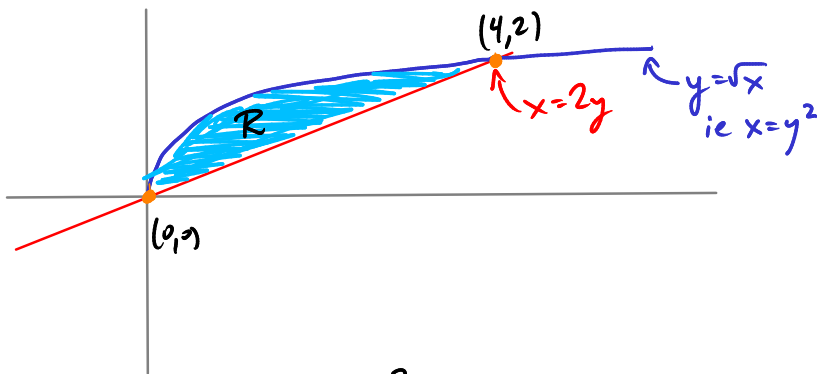
$$= \pi \cdot \left(\frac{1}{3} - \frac{1}{2} + \frac{1}{5} \right) = \underline{\underline{\frac{\pi}{30}}}$$

Another common shape: cross sections which are "washers"

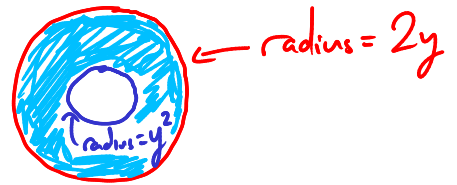


Ex Let R be the region between $y = \sqrt{x}$ and $x = 2y$.

Find the volume of the solid obtained by revolving R around the y -axis.



Slice by planes $y = \text{const.}$
Cross section:

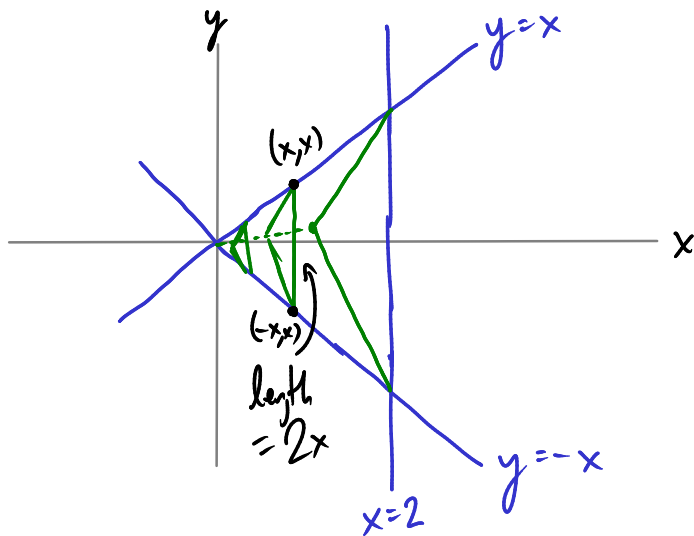


$$\begin{aligned}
 V &= \int_0^2 dy A(y) \\
 &= \pi \int_0^2 dy (4y^2 - y^4) \\
 &= \dots = \underline{\underline{\frac{64\pi}{15}}}
 \end{aligned}$$

$$\begin{aligned}
 A(y) &= \pi (2y)^2 - \pi (y^2)^2 \\
 &= \pi \cdot (4y^2 - y^4)
 \end{aligned}$$

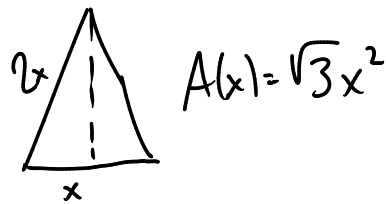
↑ area of big circle ↑ area of small circle (hole)

Ex Calculate the volume of a solid whose base is the region between $y=x$, $y=-x$ and $x=2$ and whose cross sections at fixed x are equilateral Δ 's



$$V = \int_0^2 A(x) dx$$

$A(x)$ = area of equilat Δ
with side length = $2x$



$$V = \int_0^2 A(x) dx = \int_0^2 \sqrt{3} \cdot x^2 dx = \dots = \underline{\underline{\frac{8}{3}\sqrt{3}}}$$